

# ABS. CAMBIOS

Esta prueba consta de unos recuadros en los que un polígono va cambiando porque:

- Aumenta o disminuye el número de sus lados
- Aumenta o disminuye de tamaño
- Cambia el fondo del mismo

Estos cambios vienen ordenados por las instrucciones A y B que están entre los polígonos.

Si En las instrucciones hay un cuadrado ( □ ) NO debe cambiar el número de los lados

Solo debe cambiar el número de lados cuando hay un triángulo;

1.- Si el triángulo tiene el vértice hacia arriba ( △ ) debe aumentar el número de lados

2.- Si el vértice apunta hacia abajo ( ▽ ) debe disminuir el número de lados.

Si el círculo está atravesado por una línea vertical ( | ), NO debe cambiar el tamaño

Si es una flecha hacia arriba ( ↑ ) aumente el tamaño, y si está hacia abajo ( ↓ ) debe disminuir tamaño.

Su tarea es comprobar si se cumple lo que ordenan las instrucciones A y B.

- Si sólo se cumple la instrucción A, debe dar la respuesta A
- Si sólo se cumple lo que indica la instrucción B , marque esa respuesta
- Si se cumple lo que indican ambas instrucciones conteste la letra C.
- Si no se cumple ni A ni B, conteste con la letra D.

□ igual lados	↓ igual tamaño	— igual trama	<b>RESPUESTA</b> A se cumple sólo A B se cumple sólo B C se cumplen A y B D no se cumplen A ni B
△ más lados	↑ mayor tamaño	→ más trama	
▽ menos lados	↓ menor tamaño	← menos trama	










EJEMPLO 1

	<b>INSTRUCCION - A</b> 		<b>INSTRUCCION - B</b> 	
--	----------------------------	--	----------------------------	--



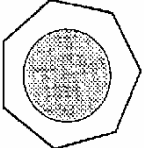
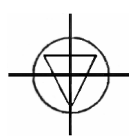
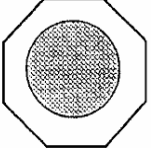
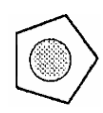
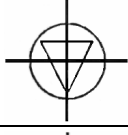

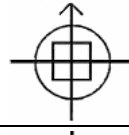
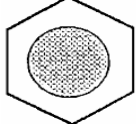
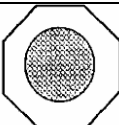
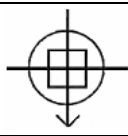
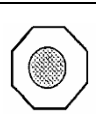
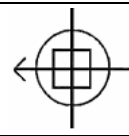


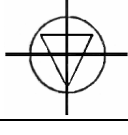

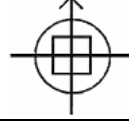

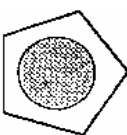

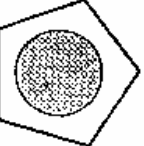
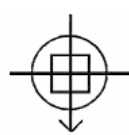
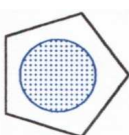

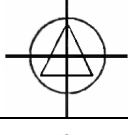

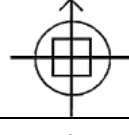

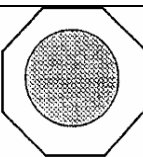
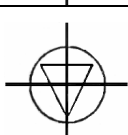
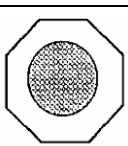
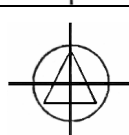
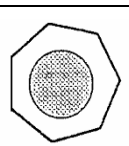

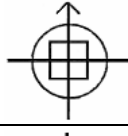
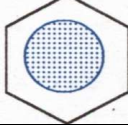
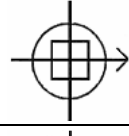
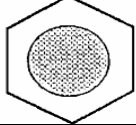

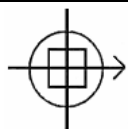
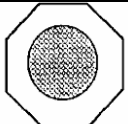
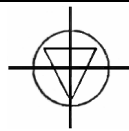
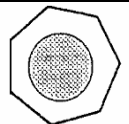
EJEMPLO 2










	<b>INSTRUCCION - A</b> 		<b>INSTRUCCION - B</b> 	
--	----------------------------	--	----------------------------	--

Las respuestas son D en E1 y D en E2.

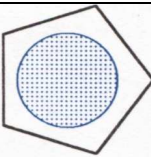
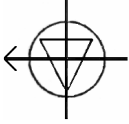
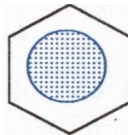



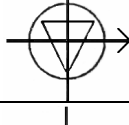

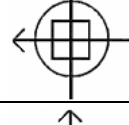


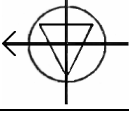

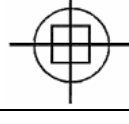
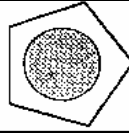
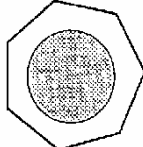
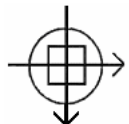
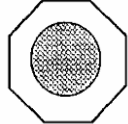
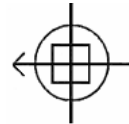


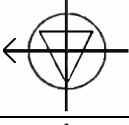

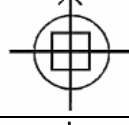
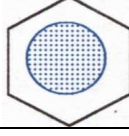
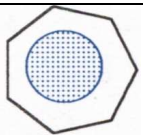
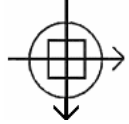

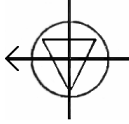


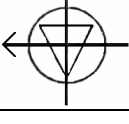

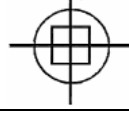

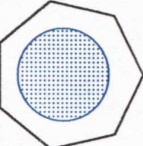

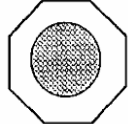
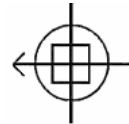




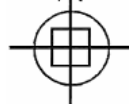

 igual lados	 igual tamaño	 igual trama	<b>RESPUESTA</b> A se cumple sólo A B se cumple sólo B C se cumplen A y B D no se cumplen A ni B
 más lados	 mayor tamaño	 más trama	
 menos lados	 menor tamaño	 menos trama	










¿Cómo y donde se cumplen las instrucciones A y B?

		<b>INSTRUCCIÓN A</b>		<b>INSTRUCCIÓN B</b>	
1.-					
2.-					
3.-					
4.-					
5.-					
6.-					
7.-					
8.-					
9.-					

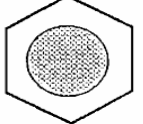
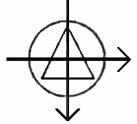


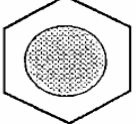
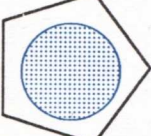
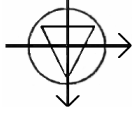
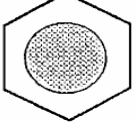
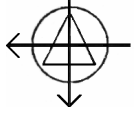


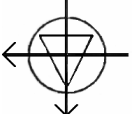




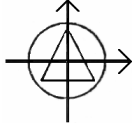
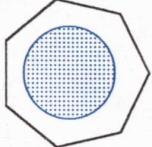
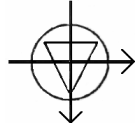
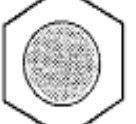
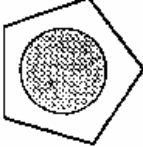
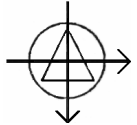

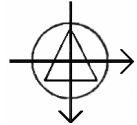

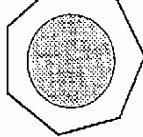
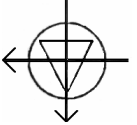
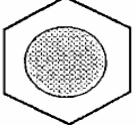

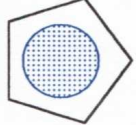
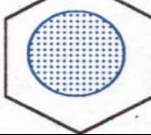
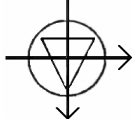
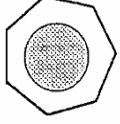
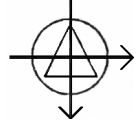




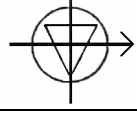

 igual lados	 igual tamaño	 igual trama	<b>RESPUESTA</b> A se cumple sólo A B se cumple sólo B C se cumplen A y B D no se cumplen A ni B
 más lados	 mayor tamaño	 más trama	
 menos lados	 menor tamaño	 menos trama	

¿Cómo y donde se cumplen las instrucciones A y B?

		INSTRUCCIÓN A		INSTRUCCIÓN B	
10.-					
11.-					
12.-					
13.-					
14.-					
15.-					
16.-					
17.-					
18.-					

 igual lados	 igual tamaño	 igual trama	<b>RESPUESTA</b> A se cumple sólo A B se cumple sólo B C se cumplen A y B D no se cumplen A ni B
 más lados	 mayor tamaño	 más trama	
 menos lados	 menor tamaño	 menos trama	

¿Cómo y donde se cumplen las instrucciones A y B?

19.-					
20.-					
21.-					
22.-					
23.-					
24.-					
25.-					
26.-					
27.-	